

Adı :
Soyadı:

2. Sınıf
Matematik

Doğal Sayılar
Onluk-Birlik-7

Basamakların isimlerini ve basamak değerlerini yazınız.

24

Birler Basamağı

4

Onlar Basamağı

20

36

..... Basamağı

.....

..... Basamağı

.....

17

..... Basamağı

.....

..... Basamağı

.....

45

..... Basamağı

.....

..... Basamağı

.....

62

..... Basamağı

.....

..... Basamağı

.....

79

..... Basamağı

.....

..... Basamağı

.....

91

..... Basamağı

.....

..... Basamağı

.....

83

..... Basamağı

.....

..... Basamağı

.....

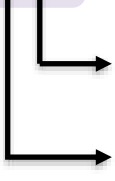
Adı :
Soyadı:

2. Sınıf Matematik

Doğal Sayılar
Onluk-Birlik-7

Basamakların isimlerini ve basamak değerlerini yazınız.

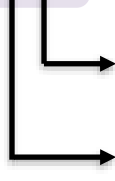
66



..... Basamağı

..... Basamağı

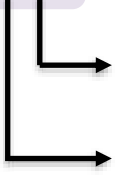
71



..... Basamağı

..... Basamağı

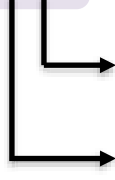
57



..... Basamağı

..... Basamağı

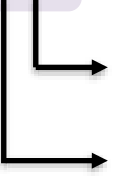
33



..... Basamağı

..... Basamağı

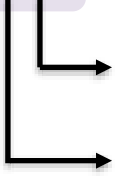
29



..... Basamağı

..... Basamağı

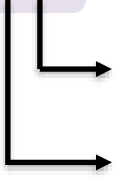
16



..... Basamağı

..... Basamağı

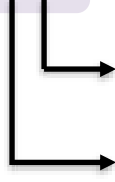
38



..... Basamağı

..... Basamağı

92



..... Basamağı

..... Basamağı